

GLENELG HIGH SCHOOL

Algebra 2 GT Summer Pre-View Packet

DUE THE FIRST WEEK OF SCHOOL

The problems in this packet are designed to help you review topics from previous mathematics courses that are important to your success in

Algebra 2 GT.

DO ALL PROBLEMS WITHOUT A CALCULATOR. Show all work that leads you to each solution on separate sheets of paper. You may use your notes from previous mathematics courses to help you. Additional copies of this packet may be obtained from the Main Office in your school or printed from the school's website.

ALL work should be completed and ready to turn in on the FIRST WEEK of school. This packet will count as part of your first quarter grade.

**ENJOY YOUR SUMMER!! WE ARE LOOKING
FORWARD TO SEEING YOU IN THE FALL.**

Student Name: _____

School: _____

Date: _____

GLENELG Algebra 2 GT Summer Review

Name _____

Show all work for all problems.

1. Line l contains the points $(-2, 3)$ and $(1, 5)$.

(a) Determine the slope of the line.

(b) Write an equation for the line.

2. Line k passes through the point $(8, -3)$ and is parallel to the line $y = 3x - 4$. Write an equation for line k .


3. Determine the slope and y -intercept of the line $2x - 3y = -12$.

4. Solve the following equations. Show your work and check your answers.

(a) $(x - 1) - (4x + 6) = 8$ (b) $2x - 7x + 4 = 5(4 - 9x)$ (c) $\frac{x - 2}{x + 3} = \frac{5}{6}$

5. Solve the inequality and graph the solution set on a number line:

$$4(t + 2) - 3 \geq 7(t + 5)$$



6. Use $A = \begin{bmatrix} 12 & 7 \\ -1 & -3 \end{bmatrix}$ and $B = \begin{bmatrix} -5 & 6 \\ 14 & 0 \end{bmatrix}$ to perform the indicated operations.

(a) $A + B$


(b) $2B - A$

(c) $-4A$

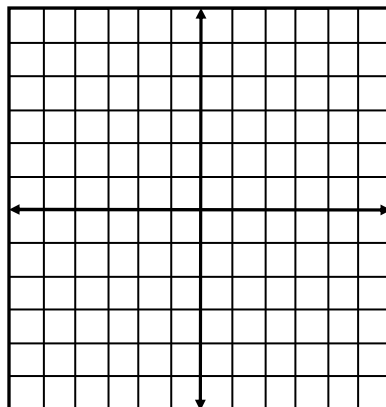
7. Graph the following equations.

GLENELG Algebra 2 GT Summer Review


a) $y = 2x - 3$



b) $-2x + 3y = 6$



8. Solve the inequality $6 + 3y < 4(3 - x)$ for y and graph the solution.



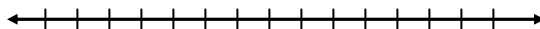
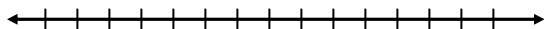
Is $(0, -5)$ a solution to the inequality?

9. Solve the system of equations:
 $-x + 3y = 0$
 $2x + 6y = 12$

10. Solve for the variable and graph the solution set on a number line:

(a) $|x - 8| = 3$

(b) $|x + 4| < 2$



11. Simplify the expressions:

GLENELG Algebra 2 GT Summer Review

(a) $(x^3 + 3x^2 - 2) + (5x^3 + x + 8) - (9x^3 - x^2 + 4)$

(b) $(4x - 3y)(x + 5y)$

(c) $(3x^2 + x + 1)(2x - 3)$

(d) $\frac{16x^4y - 12x^5y^3}{2x^3y^2}$

(e) $(5x - 2)^2$

(f) $2(x^3 - 5x^2 + 6x) - (x^2 + 3x)$

12. Factor completely:

(a) $9x^2y^3 - 3x^3y^2 - 15xy$

(b) $2x^2y - 4xy - 30y$

(c) $x^2 - x - 30$

(d) $4x^2 - 81$

(e) $x^3 + 4x^2 + 3x$

(f) $2x^2 - 5x - 3$

13. Solve the quadratic equations:

(a) $x^2 + x - 42 = 0$

(b) $(x - 2)^2 = 25$

14. Simplify:

(a) $x^3 \cdot x^2 \cdot x$

(b) $(m^3)^5$

(c) $(y^{-2})^{-3}$

(d) $\frac{a^4}{a^7}$

(e) $\frac{3xy^5}{12x^2y^0}$

(f) $\left(\frac{2}{3}\right)^3$

(g) $(-3x^2y)^2$

(h) $(8a^3b^2)(2a^{-4}b^{-5})$

(i) $\frac{3x^3y^2}{6x^{-2}y^{-1}}$

15. If y varies directly with x and y = 6 and x = -3, find y when x = 4.

16. A car salesman’s weekly salary is a base amount plus an additional amount for each car sold. The table below shows a person’s weekly salary earned for the last three weeks.

Cars sold (c)	Weekly salary (S)
4	\$500
9	\$1000
12	\$1300


What is the person’s weekly salary when 13 cars are sold? Justify your answer.

17. For each equation, identify the vertex and whether the parabola opens up or down. Vertex form of the parabola is $y = a(x - h)^2 + k$ where (h, k) are the coordinates of the vertex.

	Vertex	Opens
a) $y = 2(x - 2)^2 - 3$	_____	_____
b) $y = -2x^2 - 3$	_____	_____

18. Sketch a graph of $f(x) = x^2 - x - 2$. Then complete the characteristics below.

- Domain:
- Range:
- Axis of Symmetry:
- Increases:
- Decreases
- x-intercepts:
- y-intercept:
- Minimum Value:
- Maximum Value:
- Continuous:



19. Is (-2, 1) a solution to the following system of inequalities? Justify your answer.

NEC Honors Algebra 2 Summer Review

$$2x + 5y < 10$$
$$y \geq 3x - 2$$

20. Use trig to determine the values of x and y .

